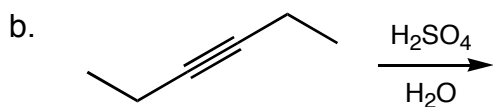
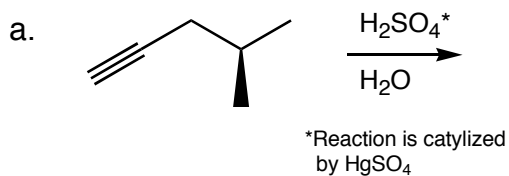
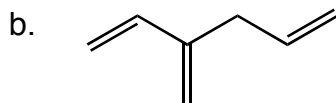
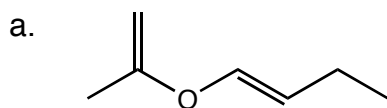


## Quiz 4

1. (20 pts.) Determine the products of the following reactions



2. (20 pts.) Draw resonance structures for the following molecules.



3. (20 pts.) Draw resonance hybrids for the following resonance structures.

